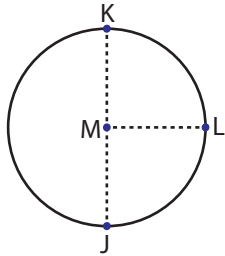


# Parts of a Circle

Identify the parts of each circle.

1)

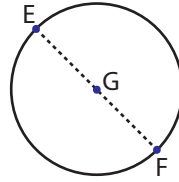


Center = \_\_\_\_\_

Radius = \_\_\_\_\_

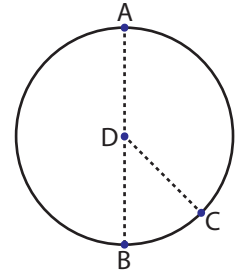
Diameter = \_\_\_\_\_

2)



Center = \_\_\_\_\_

3)

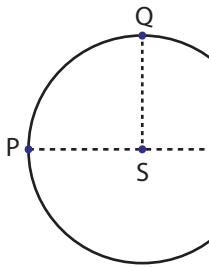


Center = \_\_\_\_\_

Radius = \_\_\_\_\_

Diameter = \_\_\_\_\_

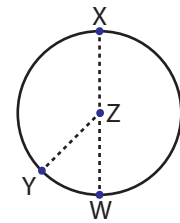
4)



Center = \_\_\_\_\_

Radius = \_\_\_\_\_

Diameter = \_\_\_\_\_

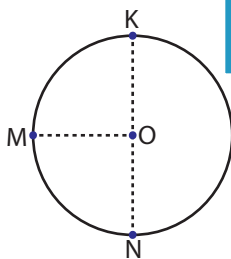


Center = \_\_\_\_\_

Radius = \_\_\_\_\_

Diameter = \_\_\_\_\_

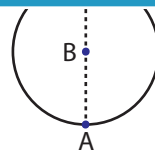
7)



Center = \_\_\_\_\_

Radius = \_\_\_\_\_

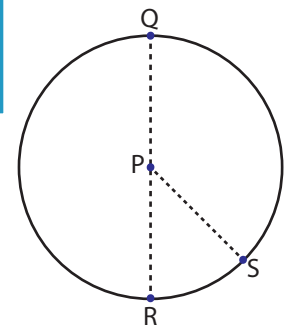
Diameter = \_\_\_\_\_



Center = \_\_\_\_\_

Radius = \_\_\_\_\_

Diameter = \_\_\_\_\_



Center = \_\_\_\_\_

Radius = \_\_\_\_\_

Diameter = \_\_\_\_\_

## PREVIEW

Gain complete access to the largest collection of worksheets in all subjects!

Members, please log in to download this worksheet.

Not a member? Please sign up to gain complete access.

[www.mathworksheets4kids.com](http://www.mathworksheets4kids.com)

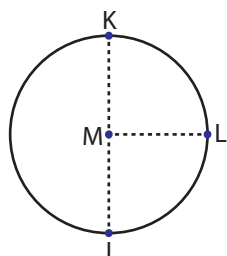
Name : \_\_\_\_\_

Parts of a Circle

ES3

Identify the parts of each circle.

1)

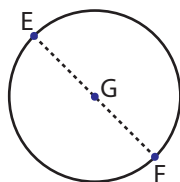


Center =     **M**    

Radius =     **ML, MJ**    

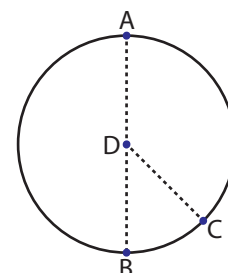
Diameter =     **KJ**    

2)



Center =     **G**    

3)

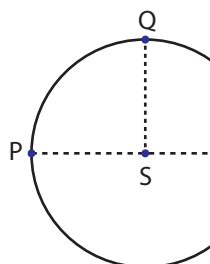


Center =     **D**    

Radius =     **DC, DB, DA**    

Diameter =     **AB**    

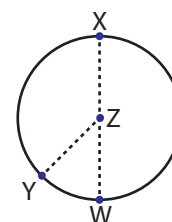
4)



Center =     **S**    

Radius =     **SP, SQ**    

Diameter =     **PR**    

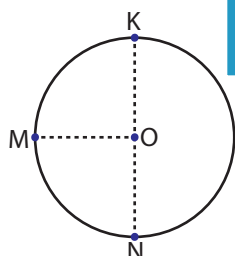


Center =     **Z**    

Radius =     **ZW, ZX, ZY**    

Diameter =     **WX**    

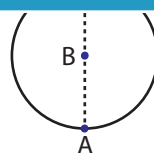
7)



Center =     **O**    

Radius =     **OK, OM, ON**    

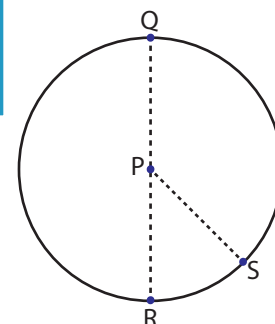
Diameter =     **KN**    



Center =     **B**    

Radius =     **BA, BC**    

Diameter =     **AC**    



Center =     **P**    

Radius =     **PR, PS, PQ**    

Diameter =     **QR**    

**PREVIEW**

Gain complete access to the largest collection of worksheets in all subjects!

Members, please log in to download this worksheet.

Not a member? Please sign up to gain complete access.

[www.mathworksheets4kids.com](http://www.mathworksheets4kids.com)