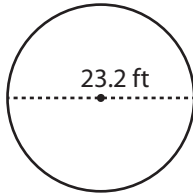


Radius / Diameter

Moderate: S3

Find the radius or diameter of each circle.

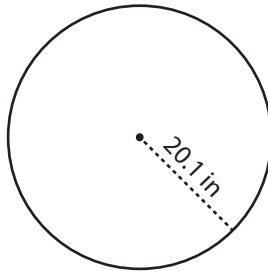
1)



Radius = _____

Diameter = _____

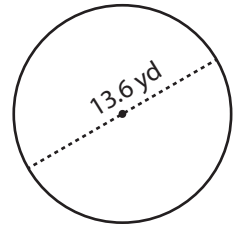
2)



Radius = _____

Diameter = _____


3)



Radius = _____

Diameter = _____

4)



Radius = _____

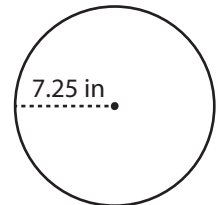
Diameter = _____

PREVIEW

Gain complete access to the largest collection of worksheets in all subjects!

Members, please log in to download this worksheet.

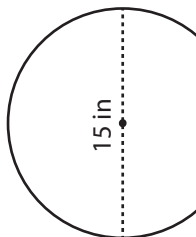
Not a member? Please sign up to gain complete access.

www.mathworksheets4kids.com

Radius = _____

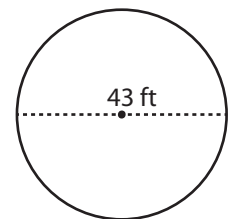
Diameter = _____

7)



Radius = _____

Diameter = _____



Radius = _____

Diameter = _____

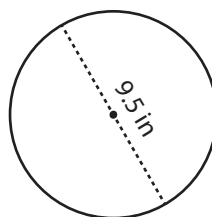
10)



Radius = _____

Diameter = _____

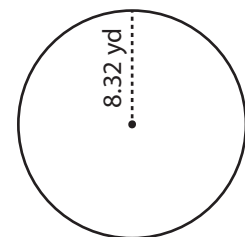
11)



Radius = _____

Diameter = _____

12)



Radius = _____

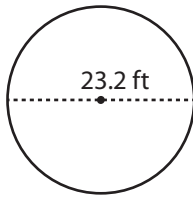
Diameter = _____

Radius / Diameter

Moderate: S3

Find the radius or diameter of each circle.

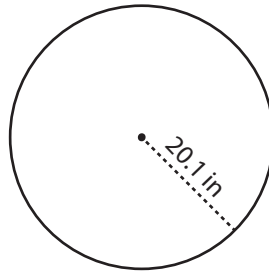
1)



Radius = 11.6 ft

Diameter = 23.2 ft

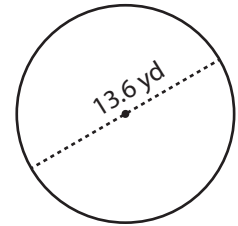
2)



Radius = 20.1 in

Diameter = 40.2 in

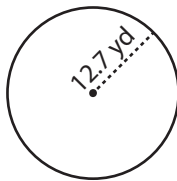
3)



Radius = 6.8 yd

Diameter = 13.6 yd

4)



Radius = 12.7 yd

Diameter = 25.4 yd

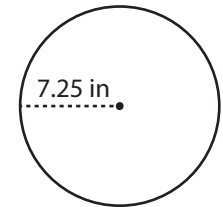
PREVIEW

Gain complete access to the largest
collection of worksheets in all subjects!

Members, please
log in to
download this
worksheet.

Not a member?
Please sign up to
gain complete
access.

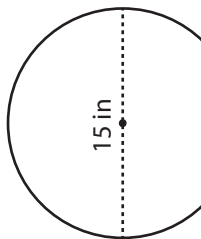
www.mathworksheets4kids.com



Radius = 7.25 in

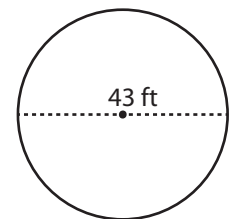
Diameter = 14.5 in

7)



Radius = 7.5 in

Diameter = 15 in



Radius = 21.5 ft

Diameter = 43 ft

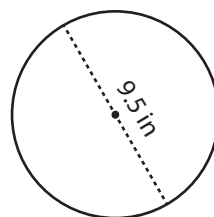
10)



Radius = 5.75 ft

Diameter = 11.5 ft

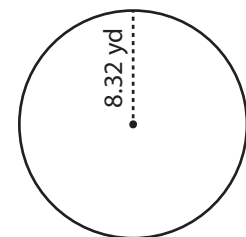
11)



Radius = 4.75 in

Diameter = 9.5 in

12)



Radius = 8.32 yd

Diameter = 16.64 yd