





# Comparing Measurements

Compare the measurements and write them under the appropriate pictures.


1) 53 feet, 74 feet



2) 64 inches, 20 inches



3) 10 inches, 12 inches




Gain complete access to the largest collection of worksheets in all subjects!



Members, please log in to download this worksheet.

Not a member? Please sign up to gain complete access.

[www.mathworksheets4kids.com](http://www.mathworksheets4kids.com)



5) 48 inches, 16 inches

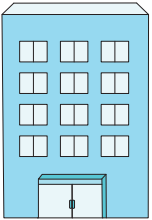


Name : \_\_\_\_\_


# Comparing Measurements

Compare the measurements and write them under the appropriate pictures.



1) 53 feet, 74 feet



53 feet




2) 64 inches, 20 inches



64 inches

3) 10 inches, 12 inches




10 inches

Gain complete access to the largest collection of worksheets in all subjects!

Members, please log in to download this worksheet.


Not a member? Please sign up to gain complete access.

[www.mathworksheets4kids.com](http://www.mathworksheets4kids.com)




18 feet

5) 48 inches, 16 inches



16 inches



48 inches



15 inches



10 inches