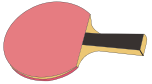


Name : _____

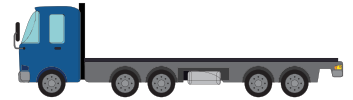
Comparing Measurements

Compare the measurements and write them under the appropriate pictures.

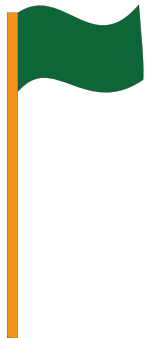
1) 13 inches, 42 inches




2) 15 feet, 20 feet




3) 19 feet, 26 feet



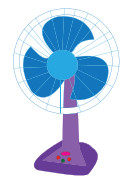
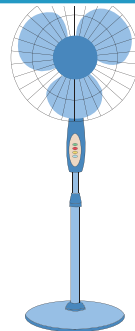
_____ inches



5) 66 inches, 84 inches



_____ inches



PREVIEW

Gain complete access to the largest collection of worksheets in all subjects!

Members, please log in to download this worksheet.

Not a member? Please sign up to gain complete access.

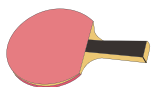
www.mathworksheets4kids.com

Name : _____

Comparing Measurements

Compare the measurements and write them under the appropriate pictures.

1) 13 inches, 42 inches




13 inches

2) 15 feet, 20 feet



20 feet

3) 19 feet, 26 feet



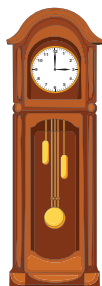
26 feet

inches



60 inches

5) 66 inches, 84 inches

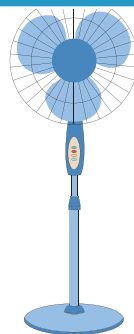


84 inches




66 inches

inches



58 inches



29 inches

PREVIEW

Gain complete access to the largest collection of worksheets in all subjects!

Members, please log in to download this worksheet.

Not a member? Please sign up to gain complete access.

www.mathworksheets4kids.com