

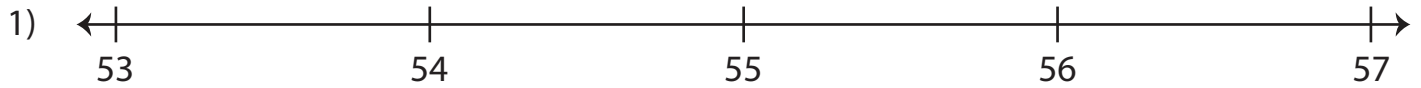
Name : _____

Number Line

Sheet 1

Observe the position of the specified numbers on the number line to answer the questions. Compare using $>$ or $<$.

The numbers on the left are smaller than the numbers on the right.



i) Does 53 lie on the left of 54?


Yes No

iii) Does 55 lie on the right of 57?

Yes No

ii) 53 54

iv) 57 55



i) Is 34 to the right of 37?

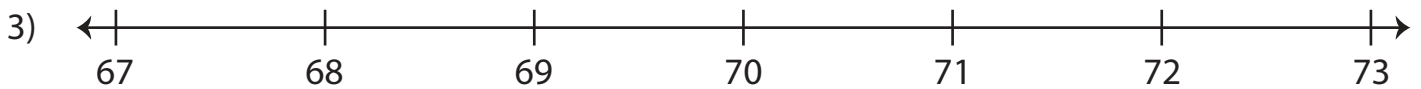
Yes No

iii) Is 44 to the left of 38?

Yes No

ii) 37 34

iv) 38 44



i) Does 72 lie on the right of 70?


Yes No

iii) Does 71 lie on the left of 68?

Yes No

ii) 72 70

iv) 68 71



i) Is 91 to the left of 93?

Yes No

iii) Is 96 to the right of 94?

Yes No

ii) 91 93

iv) 96 94

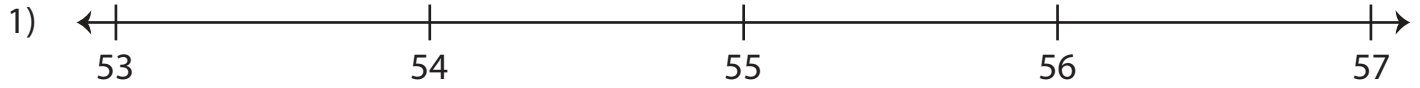
Name : _____

Number Line

Sheet 1

Observe the position of the specified numbers on the number line to answer the questions. Compare using $>$ or $<$.

The numbers on the left are smaller than the numbers on the right.



i) Does 53 lie on the left of 54?

Yes No

iii) Does 55 lie on the right of 57?

Yes No

ii) 53 54

iv) 57 55



i) Is 34 to the right of 37?

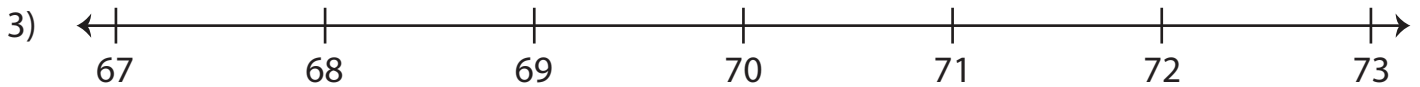
Yes No

iii) Is 44 to the left of 38?

Yes No

ii) 37 34

iv) 38 44



i) Does 72 lie on the right of 70?


Yes No

iii) Does 71 lie on the left of 68?

Yes No

ii) 72 70

iv) 68 71



i) Is 91 to the left of 93?

Yes No

iii) Is 96 to the right of 94?

Yes No

ii) 91 93

iv) 96 94