
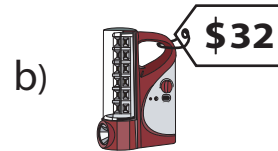
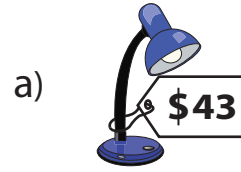


# Comparing Prices


1) Which costs more?



2) Which costs less?



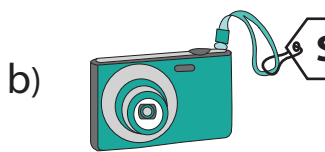
3) Which costs less?



more?



5) Which costs more?



ess?



## PREVIEW

Gain complete access to the largest collection of worksheets in all subjects!

Members, please log in to download this worksheet.


Not a member? Please sign up to gain complete access.

[www.mathworksheets4kids.com](http://www.mathworksheets4kids.com)

7) Which costs less?




8) Which costs more?


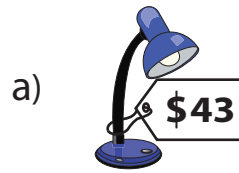


# Comparing Prices


1) Which costs more?



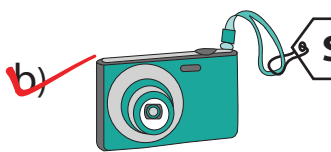
2) Which costs less?



3) Which costs less?



5) Which costs more?



**PREVIEW**

Gain complete access to the largest collection of worksheets in all subjects!

Members, please log in to download this worksheet.

Not a member? Please sign up to gain complete access.

[www.mathworksheets4kids.com](http://www.mathworksheets4kids.com)

more?



ess?



7) Which costs less?



8) Which costs more?

