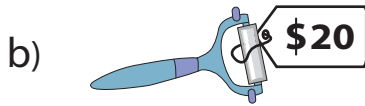
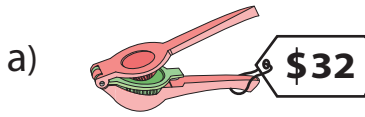



Comparing Prices

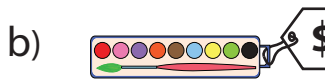
1) Which costs less?



2) Which costs more?



3) Which costs less?



PREVIEW

Gain complete access to the largest collection of worksheets in all subjects!

Members, please log in to download this worksheet.

Not a member? Please sign up to gain complete access.

www.mathworksheets4kids.com

more?

\$67

\$59

5) Which costs more?



ess?

\$15

\$11

7) Which costs more?

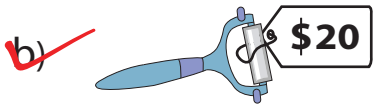
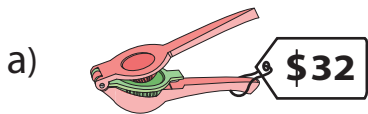


8) Which costs less?



Comparing Prices

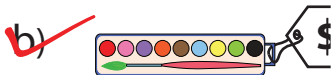
1) Which costs less?



2) Which costs more?



3) Which costs less?



PREVIEW

Gain complete access to the largest collection of worksheets in all subjects!

Members, please log in to download this worksheet.

Not a member? Please sign up to gain complete access.

www.mathworksheets4kids.com

5) Which costs more?



7) Which costs more?



8) Which costs less?

