

# Comparing 3-Digit Numbers

Compare the prices of the items in Store 1 and Store 2 and answer the questions.

**Store 1**

**Store 2**

## PREVIEW

Gain complete access to the largest collection of worksheets in all subjects!

Members, please log in to download this worksheet.

Not a member? Please sign up to gain complete access.

[www.mathworksheets4kids.com](http://www.mathworksheets4kids.com)

- 1) How much would you pay for the helicopter toy in Store 2?
- 2) Name the Store 2 toys that are cheaper than the teddy bear's.
- 3) What is the better price offered on the helicopter toy?
- 4) Which store has a better deal on the car toy?
- 5) Which store would you prefer if you had to buy a Minions toy?

---



---



---



---



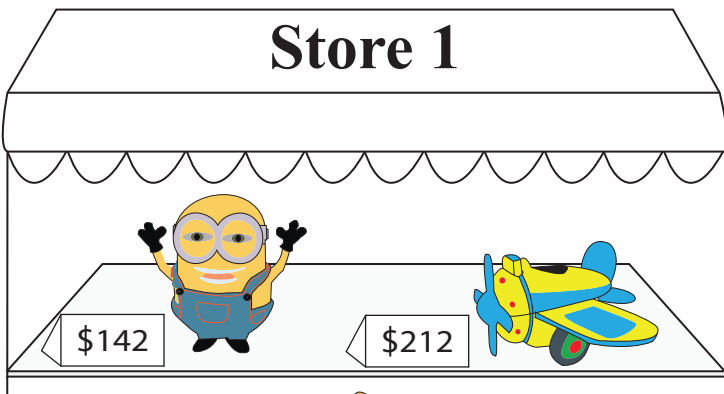
---

Name : \_\_\_\_\_



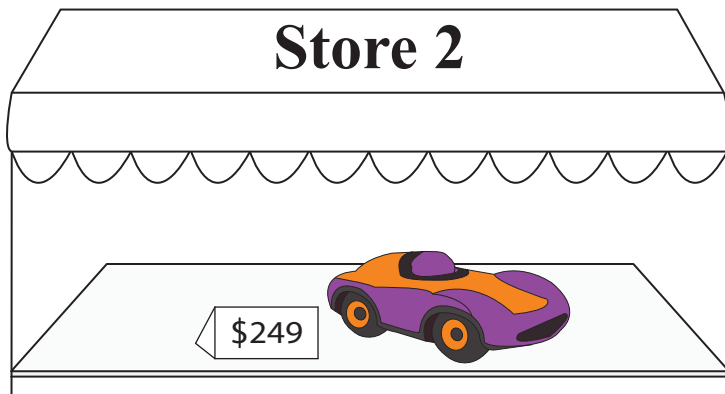
## Comparing 3-Digit Numbers

Compare the prices of the items in Store 1 and Store 2 and answer the questions.

### Store 1



### Store 2



**PREVIEW**

Gain complete access to the largest collection of worksheets in all subjects!

Members, please log in to download this worksheet.

Not a member? Please sign up to gain complete access.

[www.mathworksheets4kids.com](http://www.mathworksheets4kids.com)

1) How much would you pay for the car toy in Store 1?

**\$79**

2) Name the Store 2 toys and their prices.

**Helicopter and the Minions toy**

3) What is the better price offered on the helicopter toy?

**\$168**

4) Which store has a better deal on the car toy?

**Store 1**

5) Which store would you prefer if you had to buy a Minions toy?

**Either store will do as the price is the same.**