


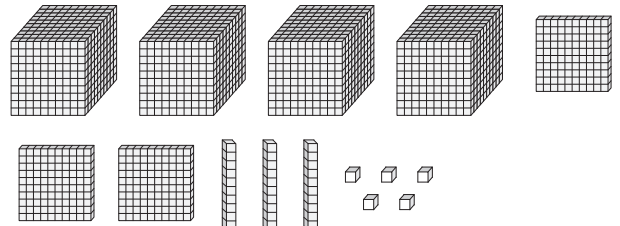
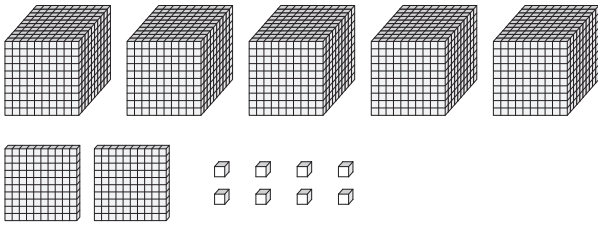
Name : _____

Comparing 4-Digit Numbers Using Blocks

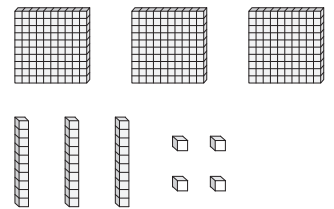
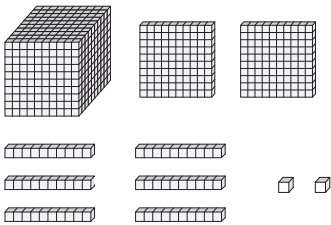
Sheet 3

Count the base-10 blocks. Compare the numbers formed using $>$, $<$, or $=$.

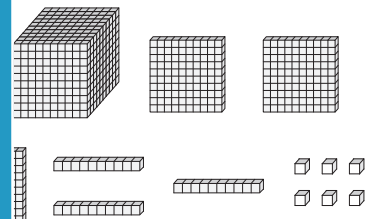
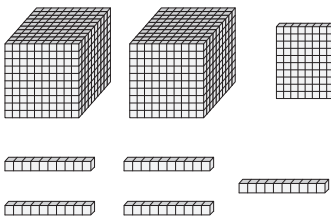
1)



2)



3)



PREVIEW

Gain complete access to the largest collection of worksheets in all subjects!

Members, please log in to download this worksheet.

Not a member? Please sign up to gain complete access.

www.mathworksheets4kids.com

4)

