

Name : _____

Number Line

Sheet 1

Observe the position of the specified numbers on the number line to answer the questions. Compare using $>$ or $<$.

The numbers on the left are smaller than the numbers on the right.



i) Does 3,151 lie on the left of 3,153?

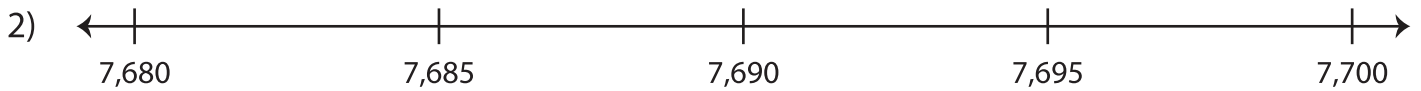
Yes No

iii) Does 3,150 lie on the right of 3,152?

Yes No

ii) 3,151 3,153

iv) 3,152 3,150



i) Is 7,680 to the right of 7,690?


Yes No

iii) Is 7,685 to the left of 7,700?

Yes No

ii) 7,690 7,680

iv) 7,685 7,700



i) Is 4,311 to the left of 4,308?

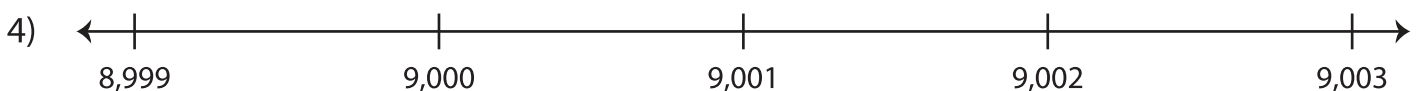
Yes No

iii) Is 4,312 to the right of 4,309?

Yes No

ii) 4,308 4,311

iv) 4,312 4,309



i) Does 9,003 lie on the right of 9,001?

Yes No

iii) Does 9,002 lie on the left of 8,999?

Yes No

ii) 9,003 9,001

iv) 8,999 9,002