

Comparing Numbers

Compare each pair of numbers. Write the greater number and the smaller number in the appropriate pans of each balance scale.

1) 13, 11



2) 14, 19



PREVIEW


Gain complete access to the largest collection of worksheets in all subjects!

Members, please log in to download this worksheet.

Not a member? Please sign up to gain complete access.

www.mathworksheets4kids.com

3) 5, 8



5) 17, 10



Name : _____

Comparing Numbers

Compare each pair of numbers. Write the greater number and the smaller number in the appropriate pans of each balance scale.


1) 13, 11



2) 14, 19



3) 5, 8




PREVIEW

Gain complete access to the largest collection of worksheets in all subjects!

Members, please log in to download this worksheet.

Not a member? Please sign up to gain complete access.

www.mathworksheets4kids.com



5) 17, 10

