

Name : _____

Count and Compare

Sheet 1

1)



How many  ? _____


Which of these are fewer?



How many  ? _____


 

2)



How many  ? _____

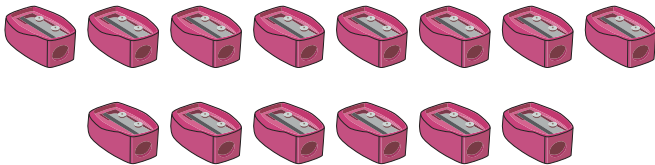
Which of these are more?



How many  ? _____

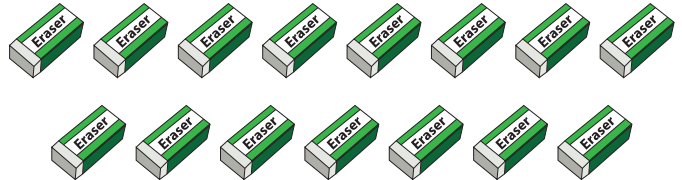
 

3)



How many  ? _____


Which of these are more?



How many  ? _____


 

4)



How many  ? _____

Which of these are fewer?



How many  ? _____