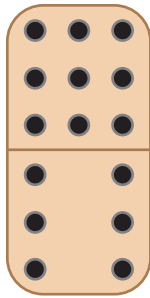

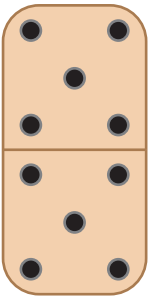


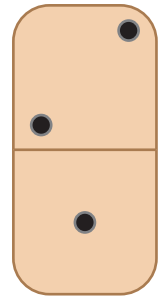
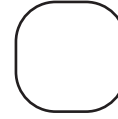

Comparing Dominos

Count and compare the number of pips on each pair of domino tiles.

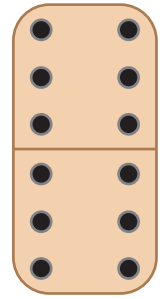
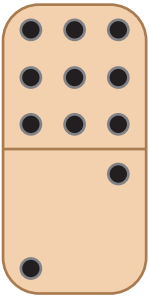
1)




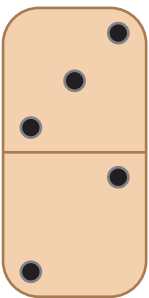
2)



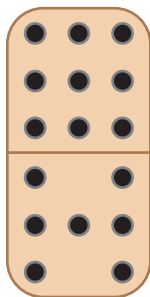

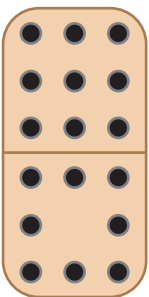
3)




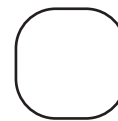
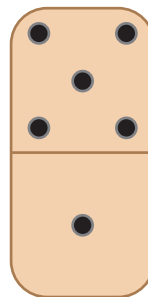
5)



7)



8)



PREVIEW

Gain complete access to the largest collection of worksheets in all subjects!

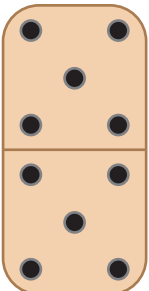
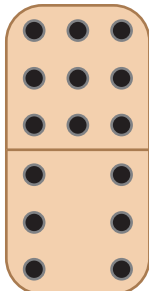
Members, please log in to download this worksheet.

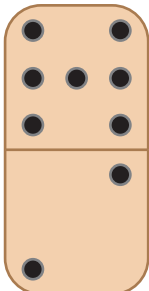

Not a member? Please sign up to gain complete access.

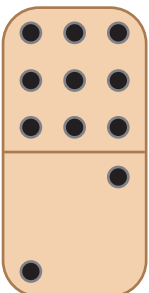
www.mathworksheets4kids.com

Comparing Dominos

Count and compare the number of pips on each pair of domino tiles.

1)  $<$ 

2)  $>$ 

3) 

$>$


PREVIEW
Gain complete access to the largest collection of worksheets in all subjects!

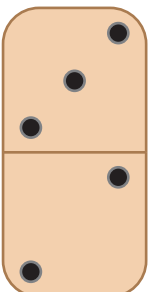
Members, please log in to download this worksheet.

Not a member? Please sign up to gain complete access.

www.mathworksheets4kids.com


$=$

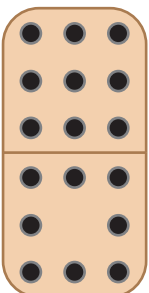


5) 

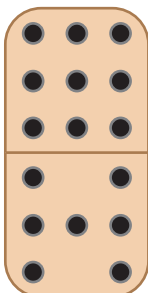
$=$

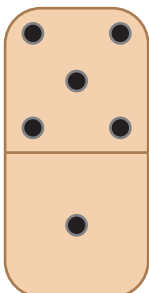
$>$



7) 

$>$



8) 

$<$

