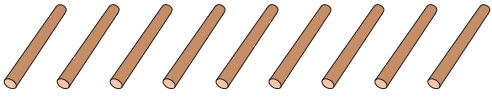


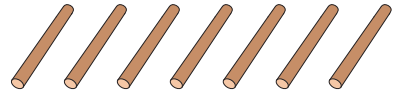
Comparing Numbers

Write the number of sticks in each set. Compare and circle the appropriate option.


1)

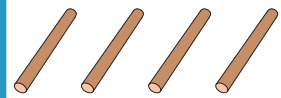


is equal to
is less than
is greater than




2)



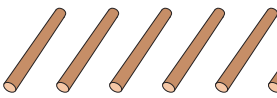


3)





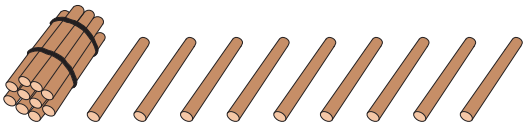
4)




is equal to



5)



is equal to
is less than
is greater than



PREVIEW

Gain complete access to the largest collection of worksheets in all subjects!

Members, please log in to download this worksheet.

Not a member? Please sign up to gain complete access.

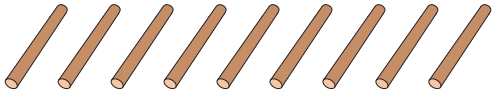
www.mathworksheets4kids.com

Name : _____

Comparing Numbers

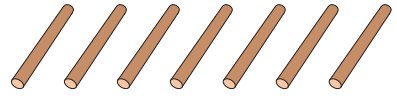
Write the number of sticks in each set. Compare and circle the appropriate option.

1)




9

is equal to
 is less than
 is greater than

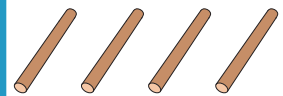


7

2)



11

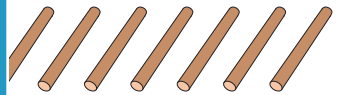


14

3)

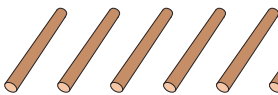


10



10

4)




8

is equal to




13

5)



19

is equal to
 is less than
 is greater than



16

PREVIEW

Gain complete access to the largest collection of worksheets in all subjects!

Members, please log in to download this worksheet.

Not a member? Please sign up to gain complete access.

www.mathworksheets4kids.com