


Comparing Numbers

Write the number of sticks in each set. Compare and circle the appropriate option.


1)



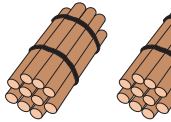
is less than

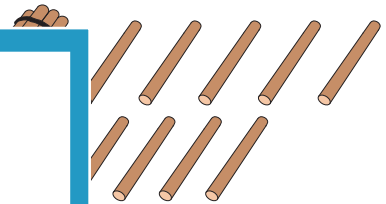
is greater than

is equal to



2)





PREVIEW

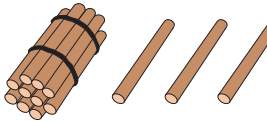
Gain complete access to the largest collection of worksheets in all subjects!

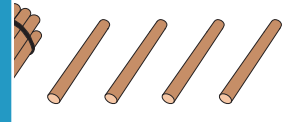
Members, please log in to download this worksheet.

Not a member? Please sign up to gain complete access.

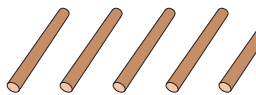
www.mathworksheets4kids.com

3)






4)



is less than




5)



is less than

is equal to

is greater than




Name : _____

Comparing Numbers

Write the number of sticks in each set. Compare and circle the appropriate option.

1)




12

is less than

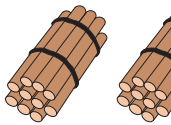
is greater than

is equal to



15

2)



20

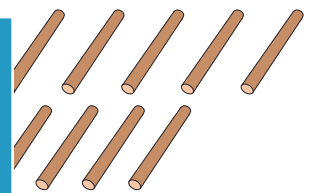
PREVIEW

Gain complete access to the largest collection of worksheets in all subjects!

Members, please log in to download this worksheet.

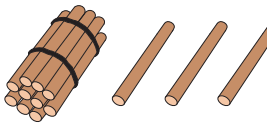
Not a member? Please sign up to gain complete access.

www.mathworksheets4kids.com

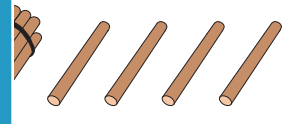


20

3)

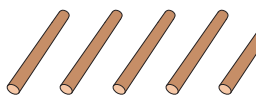


16




14

4)




7

is less than



5

5)




13

is less than

is equal to

is greater than



17