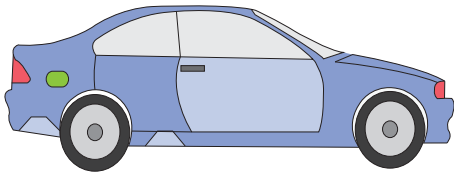



Name : _____

Counting Backward by 11s - Maze

Count backward by 11s. Color the path, and help the car reach the gas station.



			96	47	25	86	171	10
			253	242	231	220	209	198
			69	153	92	63	104	187
49	11						95	176
35	160						8	165
53	74						253	154
12	37						64	143
31							73	132
107							24	121
91	11	65	89	70	39	5	18	110
133	22	33	44	55	66	77	88	99



PREVIEW

Gain complete access to the largest collection of worksheets in all subjects!

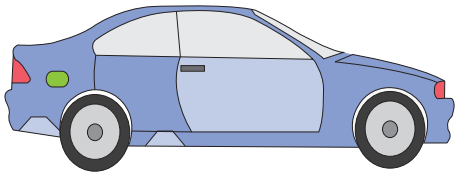
Members, please log in to download this worksheet.

Not a member? Please sign up to gain complete access.

www.mathworksheets4kids.com

Counting Backward by 11s - Maze

Count backward by 11s. Color the path, and help the car reach the gas station.



			96	47	25	86	171	10
			253	242	231	220	209	198
			69	153	92	63	104	187
49	11						95	176
35	160						8	165
53	74						253	154
12	37						64	143
31							73	132
107							24	121
91	11	65	89	70	39	5	18	110
133	22	33	44	55	66	77	88	99

PREVIEW

Gain complete access to the largest collection of worksheets in all subjects!

Members, please log in to download this worksheet.

Not a member? Please sign up to gain complete access.

www.mathworksheets4kids.com

