

# Counting Backward by 11s

Count backward by 11s, and fill in the missing numbers on each cloud.

176      154      132

66      11

88

220      176

132      121

**PREVIEW**

Gain complete access to the largest collection of worksheets in all subjects!


Members, please log in to download this worksheet.

Not a member? Please sign up to gain complete access.

[www.mathworksheets4kids.com](http://www.mathworksheets4kids.com)


# Counting Backward by 11s


Count backward by 11s, and fill in the missing numbers on each cloud.

1  187 176 165 154 143 132

2  66 22 11

3  132 88 77

4  220 209 187 176 165

5  154 143 132 121 110 99

**PREVIEW**

Gain complete access to the largest collection of worksheets in all subjects!

Members, please log in to download this worksheet.

Not a member? Please sign up to gain complete access.

[www.mathworksheets4kids.com](http://www.mathworksheets4kids.com)