
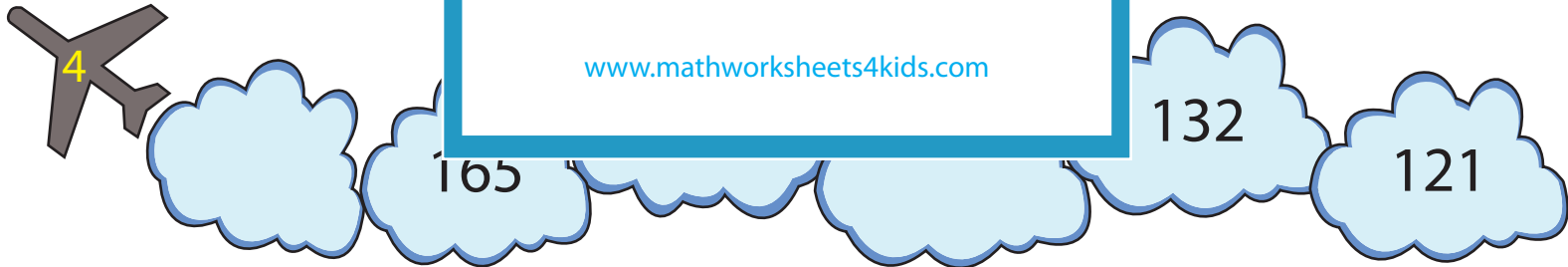



Name : _____

Counting Backward by 11s

Count backward by 11s, and fill in the missing numbers on each cloud.



PREVIEW

Gain complete access to the largest collection of worksheets in all subjects!

Members, please log in to download this worksheet.

Not a member? Please sign up to gain complete access.

www.mathworksheets4kids.com

Counting Backward by 11s

Count backward by 11s, and fill in the missing numbers on each cloud.

88 **77** 66 **55** 44 **33**

PREVIEW

Gain complete access to the largest collection of worksheets in all subjects!

Members, please log in to download this worksheet.

Not a member? Please sign up to gain complete access.

www.mathworksheets4kids.com

121 1 **77** 66

99 55 **44**

176 165 **143** 132 121

143 132 **121** 110 **99** **88**