

Name : _____

Counting Backward by 11s

Count backward by 11s, and fill in the missing numbers on each cloud.

88 77 55

165 121 143

77 44 165

187 165 143

187 165 143

PREVIEW

Gain complete access to the largest collection of worksheets in all subjects!

Members, please log in to download this worksheet.


Not a member? Please sign up to gain complete access.

www.mathworksheets4kids.com

Counting Backward by 11s

Count backward by 11s, and fill in the missing numbers on each cloud.

1



110 99 88 77 66 55

2




165 121 110

3




198 154 143

4



77 66 44 33 22

5



209 198 187 176 165 154

PREVIEW

Gain complete access to the largest collection of worksheets in all subjects!

Members, please log in to download this worksheet.

Not a member? Please sign up to gain complete access.

www.mathworksheets4kids.com