


Name : \_\_\_\_\_

# Counting Backward by 12s

Sheet 1

Count backward by 12s, and fill in the missing numbers on the seashells.

1)



2)




3)



4)



5)



**PREVIEW**

Gain complete access to the largest collection of worksheets in all subjects!

Members, please log in to download this worksheet.

Not a member? Please sign up to gain complete access.

[www.mathworksheets4kids.com](http://www.mathworksheets4kids.com)


Name : \_\_\_\_\_

# Counting Backward by 12s

Sheet 1

Count backward by 12s, and fill in the missing numbers on the seashells.

1)



2)




3)



4)



5)



**PREVIEW**

Gain complete access to the largest collection of worksheets in all subjects!

Members, please log in to download this worksheet.

Not a member? Please sign up to gain complete access.

[www.mathworksheets4kids.com](http://www.mathworksheets4kids.com)