



Name : _____

Counting Backward by 3s

Sheet 2

Count backward by 3s, complete the path, and help John reach the island.




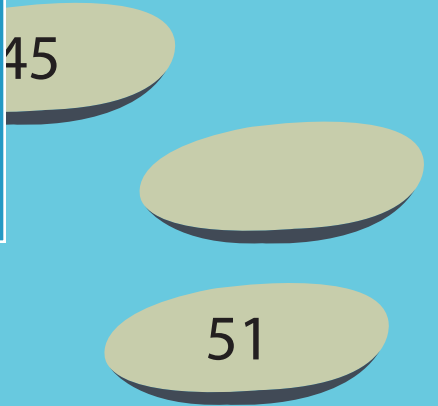

PREVIEW

Gain complete access to the largest collection of worksheets in all subjects!

Members, please log in to download this worksheet.

Not a member? Please sign up to gain complete access.


www.mathworksheets4kids.com



Name : _____

Counting Backward by 3s

Count backward by 3s, complete the path, and help John reach the island.



15 12 9 6 3

18

PREVIEW

Gain complete access to the largest collection of worksheets in all subjects!

Members, please log in to download this worksheet.

Not a member? Please sign up to gain complete access.

www.mathworksheets4kids.com

33

36

45

48

51

60

57

54

