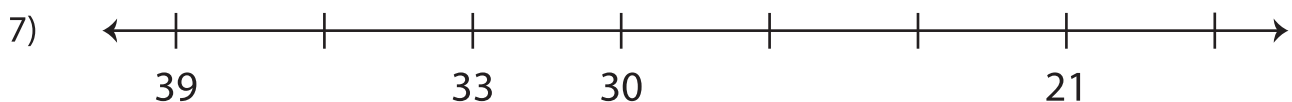
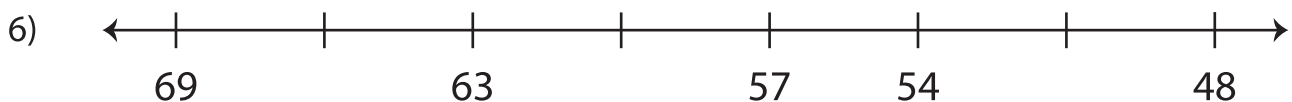
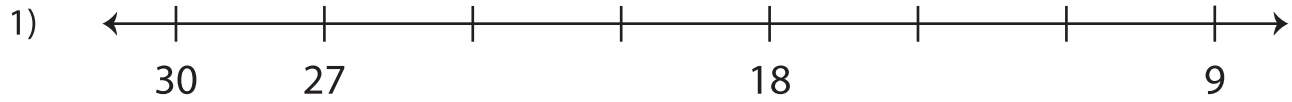


# Counting Backward by 3s - Number Line

Count backward by 3s, and complete each number line.



## PREVIEW

Gain complete access to the largest collection of worksheets in all subjects!

Members, please log in to download this worksheet.

Not a member? Please sign up to gain complete access.

www.mathworksheets4kids.com