


Name : _____

Counting Backward by 5s

Sheet 1

Count backward by 5s, and fill in the missing numbers on the apples.

1



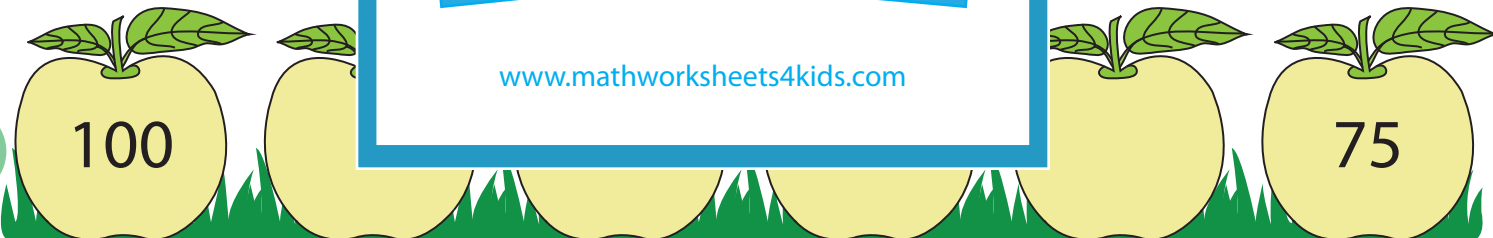
2



3



4



5



PREVIEW

Gain complete access to the largest collection of worksheets in all subjects!

Members, please log in to download this worksheet.

Not a member? Please sign up to gain complete access.


www.mathworksheets4kids.com

Name : _____

Counting Backward by 5s

Count backward by 5s, and fill in the missing numbers on the apples.

1



2




3



4



5



PREVIEW

Gain complete access to the largest collection of worksheets in all subjects!

Members, please log in to download this worksheet.

Not a member? Please sign up to gain complete access.

www.mathworksheets4kids.com