


Name : _____

Counting Backward by 7s

Sheet 1

Count backward by 7s, and fill in the missing numbers on the fishes.

1)



2)




3)



4)



5)



PREVIEW

Gain complete access to the largest collection of worksheets in all subjects!

Members, please log in to download this worksheet.

Not a member? Please sign up to gain complete access.


www.mathworksheets4kids.com

Name : _____

Counting Backward by 7s

Count backward by 7s, and fill in the missing numbers on the fishes.

1)



2)




3)



4)



5)



PREVIEW

Gain complete access to the largest collection of worksheets in all subjects!

Members, please log in to download this worksheet.

Not a member? Please sign up to gain complete access.

www.mathworksheets4kids.com