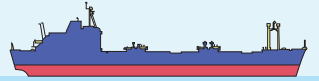


Name : \_\_\_\_\_

# Counting Backward by 8s

Sheet 1

Count backward by 8s, complete the path, and help Jane find her way to Alyssa, the mermaid.



160

144

120

80

## PREVIEW

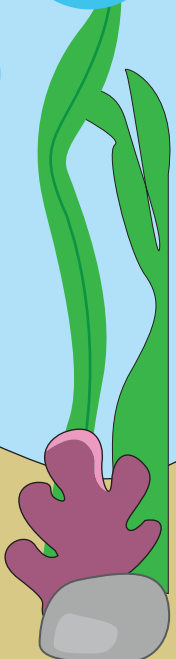

Gain complete access to the largest collection of worksheets in all subjects!

Members, please log in to download this worksheet.

Not a member? Please sign up to gain complete access.

[www.mathworksheets4kids.com](http://www.mathworksheets4kids.com)

24



# Counting Backward by 8s

Count backward by 8s, complete the path, and help Jane find her way to Alyssa, the mermaid.



160

152

144

136

128

120

## PREVIEW

88

Gain complete access to the largest collection of worksheets in all subjects!

80

72

Members, please log in to download this worksheet.

Not a member? Please sign up to gain complete access.

40

32

24

16

8

