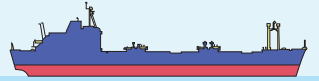


Name : _____

Counting Backward by 8s

Sheet 2

Count backward by 8s, complete the path, and help Jane find her way to Alyssa, the mermaid.



152

128

PREVIEW

Gain complete access to the largest collection of worksheets in all subjects!

Members, please log in to download this worksheet.

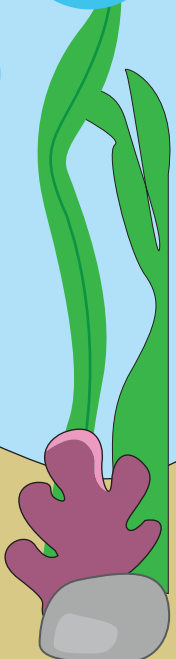

Not a member? Please sign up to gain complete access.

72

32


www.mathworksheets4kids.com

8



Counting Backward by 8s

Count backward by 8s, complete the path, and help Jane find her way to Alyssa, the mermaid.



160

152

144

136

128

PREVIEW

88

Gain complete access to the largest collection of worksheets in all subjects!

80

120

Members, please log in to download this worksheet.

Not a member? Please sign up to gain complete access.

72

40

32

www.mathworksheets4kids.com

24

16

8

