
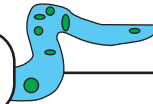


Name : _____



Counting Backward by 9s



Sheet 1

Count backward by 9s, and write the missing numbers in the boxes.

1)

135		117		99	90		72
-----	--	-----	--	----	----	--	----

2)

						198	
--	--	--	--	--	--	-----	--

3)

72	63					9
----	----	--	--	--	--	---

4)

	21					171	
--	----	--	--	--	--	-----	--

5)

	14					90
--	----	--	--	--	--	----

PREVIEW

Gain complete access to the largest collection of worksheets in all subjects!

Members, please log in to download this worksheet.

Not a member? Please sign up to gain complete access.

www.mathworksheets4kids.com


6)

216		198	189	180		162	
-----	--	-----	-----	-----	--	-----	--

7)

	99		81	72		54	
--	----	--	----	----	--	----	--

Name : _____



Counting Backward by 9s

Sheet 1

Count backward by 9s, and write the missing numbers in the boxes.

1)	135	126	117	108	99	90	81	72
----	-----	------------	-----	------------	----	----	-----------	----

2)	252	243					198	189
----	------------	------------	--	--	--	--	-----	------------

3)	72	63					18	9
----	----	----	--	--	--	--	-----------	---

4)	225	216					171	162
----	------------	-----	--	--	--	--	-----	------------

5)	153	144					99	90
----	------------	-----	--	--	--	--	-----------	----

6)	216	207	198	189	180	171	162	153
----	-----	------------	-----	-----	-----	------------	-----	------------

7)	108	99	90	81	72	63	54	45
----	------------	----	-----------	----	----	-----------	----	-----------

PREVIEW

Gain complete access to the largest collection of worksheets in all subjects!

Members, please log in to download this worksheet.

Not a member? Please sign up to gain complete access.

www.mathworksheets4kids.com