
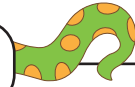


Name : _____



Counting Backward by 9s



Sheet 4

Count backward by 9s, and write the missing numbers in the boxes.

1)

	144	135		117		99	90
--	-----	-----	--	-----	--	----	----

2)

270							207
-----	--	--	--	--	--	--	-----

3)

	81					36	
--	----	--	--	--	--	----	--

4)

243						189	180
-----	--	--	--	--	--	-----	-----

5)

	16						108
--	----	--	--	--	--	--	-----

6)

234		216		198	189	180	
-----	--	-----	--	-----	-----	-----	--

7)

			99	90		72	
--	--	--	----	----	--	----	--


PREVIEW

Gain complete access to the largest collection of worksheets in all subjects!

Members, please log in to download this worksheet.

Not a member? Please sign up to gain complete access.

www.mathworksheets4kids.com



Counting Backward by 9s

Count backward by 9s, and write the missing numbers in the boxes.

1)	153	144	135	126	117	108	99	90
----	------------	-----	-----	------------	-----	------------	----	----

2)	270	26					216	207
----	-----	-----------	--	--	--	--	------------	-----

3)	90	81					36	27
----	-----------	----	--	--	--	--	----	-----------

4)	243	23					189	180
----	-----	-----------	--	--	--	--	-----	-----

5)	171	16					117	108
----	------------	----	--	--	--	--	------------	-----

6)	234	225	216	207	198	189	180	171
----	-----	------------	-----	------------	-----	-----	-----	------------

7)	126	117	108	99	90	81	72	63
----	------------	------------	------------	----	----	-----------	----	-----------

PREVIEW

Gain complete access to the largest collection of worksheets in all subjects!

Members, please log in to download this worksheet.

Not a member? Please sign up to gain complete access.

www.mathworksheets4kids.com