







Name : \_\_\_\_\_

# Counting Coins & Bills

Up to \$10: S1

Count the money and write the total amount.

1) 	<hr/>
2) 	<hr/>
3) 	<hr/>
4) 	<hr/>
5) 	<hr/>
6) 	<hr/>

# PREVIEW

Gain complete access to the largest collection of worksheets in all subjects!

Members, please log in to download this worksheet.

Not a member? Please sign up to gain complete access.

[www.mathworksheets4kids.com](http://www.mathworksheets4kids.com)







Name : \_\_\_\_\_

# Answer key

## Counting Coins & Bills

Up to \$10: S1

Count the money and write the total amount.

<p>1)</p>  <p>4 x \$10 = \$40 1 x \$5 = \$5 1 x \$1 = \$1 1 x 25c = \$0.25</p>	<p><b>\$41.05</b></p>
<p>2)</p>  <p>4 x \$10 = \$40 1 x \$5 = \$5 1 x \$1 = \$1 1 x \$2 = \$2</p>	<p><b>\$47.30</b></p>
<p>3)</p>  <p>1 x \$5 = \$5 1 x \$10 = \$10 1 x \$1 = \$1 1 x 25c = \$0.25</p>	<p><b>\$26.15</b></p>
<p>4)</p>  <p>2 x \$10 = \$20 1 x \$1 = \$1</p>	<p><b>\$35.10</b></p>
<p>5)</p>  <p>2 x \$10 = \$20 1 x \$2 = \$2 1 x 25c = \$0.25 1 x \$1 = \$1</p>	<p><b>\$54.25</b></p>
<p>6)</p>  <p>1 x \$10 = \$10 4 x 25c = \$1.00</p>	<p><b>\$11.00</b></p>

**PREVIEW**

Gain complete access to the largest collection of worksheets in all subjects!

Members, please log in to download this worksheet.

Not a member? Please sign up to gain complete access.

[www.mathworksheets4kids.com](http://www.mathworksheets4kids.com)