



# Saving Money

Find the total amount in each piggy bank and answer the questions.

**Amelia**




**Jacob**




**Theo**

**Mia**



**Toby**



**PREVIEW**

Gain complete access to the largest collection of worksheets in all subjects!

Members, please log in to download this worksheet.

Not a member? Please sign up to gain complete access.

[www.mathworksheets4kids.com](http://www.mathworksheets4kids.com)

1) What is the total saving in Jacob's piggy bank? \_\_\_\_\_

2) How much money has Mia saved? \_\_\_\_\_

3) If Amelia puts a 5 pence coin in her piggy bank, what will her savings be? \_\_\_\_\_

4) If Toby gives all the coins from his piggy bank to his brother, how much will he have? \_\_\_\_\_

5) Whose piggy bank has £110.12 saved in it? \_\_\_\_\_