


# Is There Enough Money?



1) James has \$ \_\_\_\_\_ in his wallet. He wants to buy a 40-piece screwdriver set priced at \$17.32. Find out if James can buy the screwdriver set.

\_\_\_\_\_



2) Amy has \$ \_\_\_\_\_ in her wallet. She wants to buy a T-shirt priced at \$21.99. Is th


\_\_\_\_\_

3) Elizabeth has \$ \_\_\_\_\_ She wants to buy a laptop bag priced at

\_\_\_\_\_

4) Isabella has \$ \_\_\_\_\_ she wants to buy sandals priced at \$69.95. Can

\_\_\_\_\_



5) Nancy has \$ \_\_\_\_\_ in her wallet. She wants to buy a USB cable priced at \$11.67. Does Nancy have enough money to buy the USB cable?

\_\_\_\_\_

**PREVIEW**

Gain complete access to the largest collection of worksheets in all subjects!

Members, please log in to download this worksheet.

Not a member? Please sign up to gain complete access.

[www.mathworksheets4kids.com](http://www.mathworksheets4kids.com)

Name : \_\_\_\_\_

# Is There Enough Money?



1) James has \$ 17.32

in his wallet. He wants to buy a 40-piece

screwdriver set priced at \$17.32. Find out if James can buy the screwdriver set.

**Yes, he can.**



2) Amy has \$ 21.36

in her wallet. She wants to buy a T-shirt

priced at \$21.99. Is th

# PREVIEW

Gain complete access to the largest collection of worksheets in all subjects!

Members, please log in to download this worksheet.

Not a member? Please sign up to gain complete access.

[www.mathworksheets4kids.com](http://www.mathworksheets4kids.com)

3) Elizabeth has \$ 35

She wants to buy a


laptop bag priced at

4) Isabella has \$ 65

she wants to buy sandals

priced at \$69.95. Can

**No, she can't.**



5) Nancy has \$ 10.30

in her wallet. She wants to buy a USB

cable priced at \$11.67. Does Nancy have enough money to buy the USB cable?

**No, she doesn't.**