




Counting Money

Count the bills and coins and find the total amount.



- a) \$25.38 b) \$35.35
c) \$25.50 d) \$37.60



- a) \$31.21 b) \$15.18
c) \$50.84 d) \$70.46



PREVIEW

Gain complete access to the largest collection of worksheets in all subjects!

Members, please log in to download this worksheet.

Not a member? Please sign up to gain complete access.

www.mathworksheets4kids.com

- \$223.47 b) \$226.05
\$199.65 d) \$265.10



- \$58.00 b) \$50.32
\$39.14 d) \$50.60



- \$8.31 b) \$21.97
c) \$25.94 d) \$10.24



- a) \$306.35 b) \$328.39
c) \$206.00 d) \$237.15