




# Saving Money

Find the total amount in each piggy bank and answer the questions.



## PREVIEW

Gain complete access to the largest collection of worksheets in all subjects!

Members, please log in to download this worksheet.

Not a member? Please sign up to gain complete access.

[www.mathworksheets4kids.com](http://www.mathworksheets4kids.com)

1) How much money has Louis saved?

\_\_\_\_\_

2) If Zoey puts a two quarter coins in her piggy bank, how much money will she have?

\_\_\_\_\_

3) What is the total savings of Dave and Louis?

\_\_\_\_\_

4) Whose piggy bank has \$80.21 saved in it?




\_\_\_\_\_

5) If Amy gives all the coins from her piggy bank to her brother, how much money will she have?

\_\_\_\_\_

**Saving Money**

Find the total amount in each piggy bank and answer the questions.



**PREVIEW**

Gain complete access to the largest collection of worksheets in all subjects!

Members, please log in to download this worksheet.

Not a member? Please sign up to gain complete access.

[www.mathworksheets4kids.com](http://www.mathworksheets4kids.com)

1) How much money has Louis saved?

**\$61.52**

2) If Zoey puts a two quarter coins in her piggy bank, how much money will she have?

ings

**\$12.61**

3) What is the total savings of Dave and Louis?

**\$181.51**

4) Whose piggy bank has \$80.21 saved in it?

**Dave**

5) If Amy gives all the coins from her piggy bank to her brother, how much will she have?

**\$55.00**