

Name : _____

Counting Coins & Bills

Up to \$1:51

Count the money and write the total amount.

1)



2)



3)



4)



5)



6)









Name : _____

Answer Key

Counting Coins & Bills

Up to \$1:51

Count the money and write the total amount.

<p>1)</p> 	<p>\$5.16</p> <hr/>
<p>2)</p> 	<p>\$4.07</p> <hr/>
<p>3)</p> 	<p>\$1.58</p> <hr/>
<p>4)</p> 	<p>\$3.32</p> <hr/>
<p>5)</p> 	<p>\$2.50</p> <hr/>
<p>6)</p> 	<p>\$7.02</p> <hr/>