

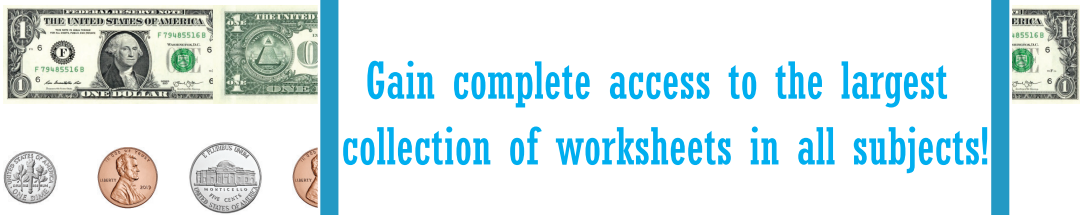





Name : _____

Counting Coins & Bills

Up to \$1: S2

Count the money and write the total amount.

1) 	<hr/>
2) 	<hr/>
3) 	<hr/>
4) 	<hr/>
5) 	<hr/>
6) 	<hr/>

PREVIEW

Gain complete access to the largest collection of worksheets in all subjects!

Members, please log in to download this worksheet.

Not a member? Please sign up to gain complete access.

www.mathworksheets4kids.com







Name : _____

Answer Key

Counting Coins & Bills

Up to \$1:52

Count the money and write the total amount.

1) 	<p style="text-align: right;"><u>\$6.04</u></p>
2) 	<p style="text-align: right;"><u>\$3.48</u></p>
3) 	<p style="text-align: right;"><u>\$5.37</u></p>
4) 	<p style="text-align: right;"><u>\$1.29</u></p>
5) 	<p style="text-align: right;"><u>\$7.05</u></p>
6) 	<p style="text-align: right;"><u>\$4.30</u></p>

PREVIEW

Gain complete access to the largest collection of worksheets in all subjects!

Members, please log in to download this worksheet.

Not a member? Please sign up to gain complete access.

www.mathworksheets4kids.com