







Name : _____

Counting Coins & Bills

Up to \$1: S3

Count the money and write the total amount.

<p>1)</p> 	<hr/>
<p>2)</p> 	<hr/>
<p>3)</p> 	<hr/>
<p>4)</p> 	<hr/>
<p>5)</p> 	<hr/>
<p>6)</p> 	<hr/>

PREVIEW

Gain complete access to the largest collection of worksheets in all subjects!

Members, please log in to download this worksheet.

Not a member? Please sign up to gain complete access.

www.mathworksheets4kids.com







Name : _____

Answer Key

Counting Coins & Bills

Up to \$1: S3

Count the money and write the total amount.

1) 		<p>\$3.12</p> <hr/>
2) 	<p>PREVIEW</p> <p>Gain complete access to the largest collection of worksheets in all subjects!</p> <p>Members, please log in to download this worksheet.</p> <p>Not a member? Please sign up to gain complete access.</p> <p>www.mathworksheets4kids.com</p>	<p>\$5.09</p> <hr/>
3) 		<p>\$2.26</p> <hr/>
4) 		<p>\$4.70</p> <hr/>
5) 		<p>\$1.32</p> <hr/>
6) 		<p>\$6.41</p> <hr/>