





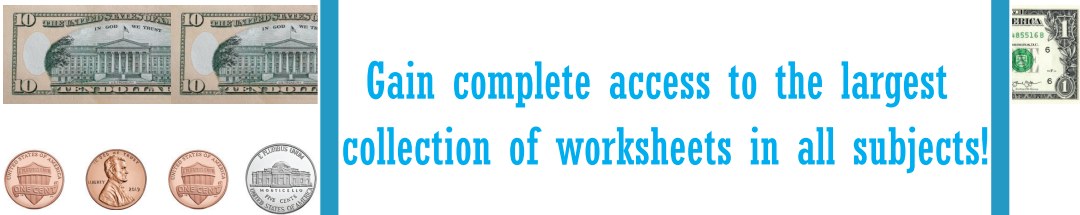



Name : \_\_\_\_\_

# Answer Key

## Counting Coins & Bills

Up to \$10: S2

Count the money and write the total amount.

1) 		<p><b>\$20.50</b></p> <hr/>
2) 	<p><b>PREVIEW</b></p> <p>Gain complete access to the largest collection of worksheets in all subjects!</p> <p>Members, please log in to download this worksheet.</p> <p>Not a member? Please sign up to gain complete access.</p> <p><a href="http://www.mathworksheets4kids.com">www.mathworksheets4kids.com</a></p>	<p><b>\$17.23</b></p> <hr/>
3) 		<p><b>\$41.08</b></p> <hr/>
4) 		<p><b>\$11.00</b></p> <hr/>
5) 		<p><b>\$31.34</b></p> <hr/>
6) 		<p><b>\$60.11</b></p> <hr/>