







Name : _____

Counting Coins & Bills

Up to \$10: S3

Count the money and write the total amount.

<p>1)</p> 	<hr/>
<p>2)</p> 	<hr/>
<p>3)</p> 	<hr/>
<p>4)</p> 	<hr/>
<p>5)</p> 	<hr/>
<p>6)</p> 	<hr/>

PREVIEW

Gain complete access to the largest collection of worksheets in all subjects!

Members, please log in to download this worksheet.

Not a member? Please sign up to gain complete access.

www.mathworksheets4kids.com







Name : _____

Answer Key

Counting Coins & Bills

Up to \$10: S3

Count the money and write the total amount.

1) 	<p style="text-align: center;">\$45.50</p> <hr/>
2) 	<p style="text-align: center;">\$60.09</p> <hr/>
3) 	<p style="text-align: center;">\$21.62</p> <hr/>
4) 	<p style="text-align: center;">\$50.28</p> <hr/>
5) 	<p style="text-align: center;">\$12.11</p> <hr/>
6) 	<p style="text-align: center;">\$37.00</p> <hr/>

PREVIEW

Gain complete access to the largest collection of worksheets in all subjects!

Members, please log in to download this worksheet.

Not a member? Please sign up to gain complete access.

www.mathworksheets4kids.com