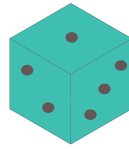
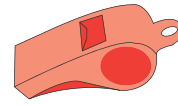


What Can You Buy?

Count the coins and circle what you can buy.



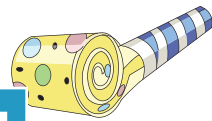

8¢



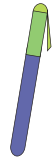
11¢



15¢




12¢



17¢



72¢



64¢



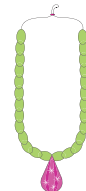
\$1.41



\$1.93




40¢




46¢



43¢



70¢



65¢



61¢

PREVIEW

Gain complete access to the largest collection of worksheets in all subjects!

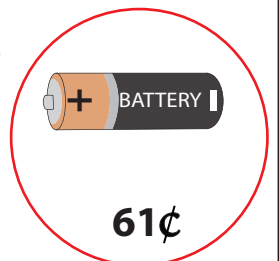


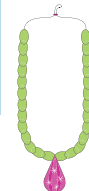
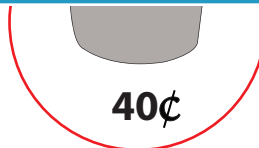
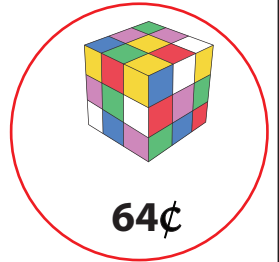
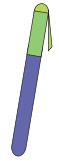
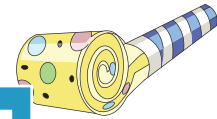
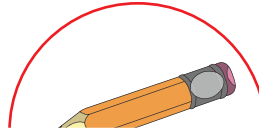

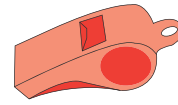
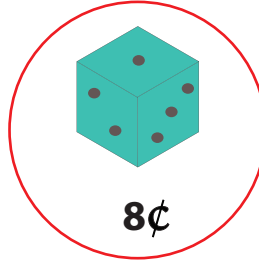
Members, please log in to download this worksheet.

Not a member? Please sign up to gain complete access.

www.mathworksheets4kids.com

What Can You Buy?

Count the coins and circle what you can buy.



PREVIEW

Gain complete access to the largest collection of worksheets in all subjects!

Members, please log in to download this worksheet.

Not a member? Please sign up to gain complete access.

www.mathworksheets4kids.com