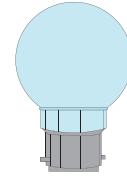


What Can You Buy?


Count the coins and circle what you can buy.




\$2.63



\$2.14



\$2.10



20¢



29¢

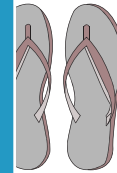
PREVIEW

Gain complete access to the largest collection of worksheets in all subjects!

Members, please log in to download this worksheet.

Not a member? Please sign up to gain complete access.

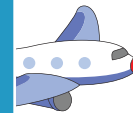
www.mathworksheets4kids.com



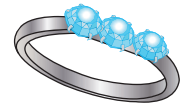
94¢



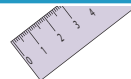
89¢



\$1.70



\$1.50



13¢



11¢




16¢



\$1.54



\$1.62



\$1.68