

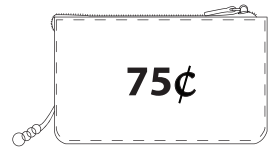
Counting Coins - Matching

Count the coins and match the amount.

1)



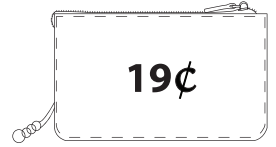
2)




3)



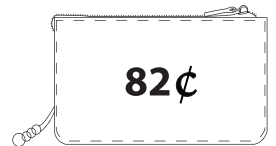
4)



5)



6)



7)

