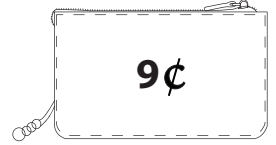



# Counting Coins - Matching

Count the coins and match the amount.

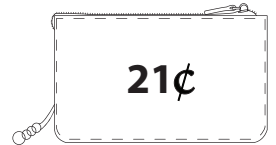

1)



2)



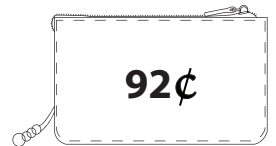
3)





4)



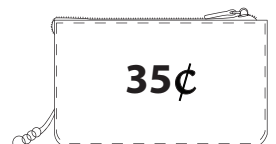
5)



6)



7)



**PREVIEW**

Gain complete access to the largest collection of worksheets in all subjects!

Members, please log in to download this worksheet.

Not a member? Please sign up to gain complete access.

[www.mathworksheets4kids.com](http://www.mathworksheets4kids.com)