

How Much More Do You Need?



penny



nickel



dime



quarter



half dollar

Count the coins and draw the extra coins required to buy the object.

1)



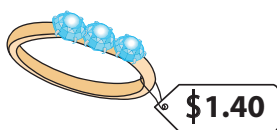
2)




3)



4)



5)



PREVIEW

Gain complete access to the largest collection of worksheets in all subjects!

Members, please log in to download this worksheet.

Not a member? Please sign up to gain complete access.

www.mathworksheets4kids.com

6) Draw the coins to make 41 ¢.
(use five coins)

7) Draw the coins to make \$ 0.06.
(use two coins)

How Much More Do You Need?



penny



nickel



dime



quarter



half dollar

Count the coins and draw the extra coins required to buy the object.

(Answers may vary)

1)



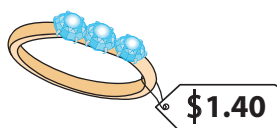
2)



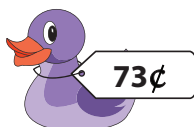
3)



4)



5)



PREVIEW

Gain complete access to the largest collection of worksheets in all subjects!

Members, please log in to download this worksheet.

Not a member? Please sign up to gain complete access.

www.mathworksheets4kids.com

6) Draw the coins to make 41 ¢.
(use five coins)



7) Draw the coins to make \$ 0.06.
(use two coins)

