

How Much More Do You Need?



penny



nickel



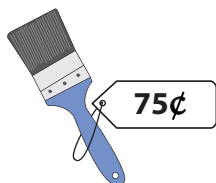
dime



quarter

Count the coins and draw the extra coins required to buy the object.

1)




2)




3)



4)



5)



PREVIEW

Gain complete access to the largest collection of worksheets in all subjects!

Members, please log in to download this worksheet.

Not a member? Please sign up to gain complete access.

www.mathworksheets4kids.com

6) Draw the coins to make 15 ¢.
(use two coins)

7) Draw the coins to make \$ 0.31.
(use three coins)