



Same Amount Different Coins


Show two different ways to make the given amount.

1)  **\$1.14**

_____ quarters	_____ quarters
_____ dimes	_____ dimes
_____ nickels	_____ nickels
_____ pennies	_____ pennies

2)  **62¢**

_____ quarters	_____ quarters
_____ dimes	_____ dimes
_____ nickels	_____ nickels
_____ pennies	_____ pennies

3)  **8**

_____ quarters
_____ dimes
_____ nickels
_____ pennies

\$0.53

_____ quarters
_____ dimes
_____ nickels
_____ pennies


PREVIEW

Gain complete access to the largest collection of worksheets in all subjects!

Members, please log in to download this worksheet.

Not a member? Please sign up to gain complete access.

www.mathworksheets4kids.com

5) 

_____ quarters	_____ quarters
_____ dimes	_____ dimes
_____ nickels	_____ nickels
_____ pennies	_____ pennies

49

_____ quarters	_____ quarters
_____ dimes	_____ dimes
_____ nickels	_____ nickels
_____ pennies	_____ pennies