

Name: \_\_\_\_\_

# Comparing Coins

Count the coins in each pouch. Use  $<$ ,  $>$  or  $=$  symbols to compare the money.

1)

2)

3)

4)

5)

**PREVIEW**

Gain complete access to the largest collection of worksheets in all subjects!

Members, please log in to download this worksheet.


Not a member? Please sign up to gain complete access.

[www.mathworksheets4kids.com](http://www.mathworksheets4kids.com)


Name: \_\_\_\_\_

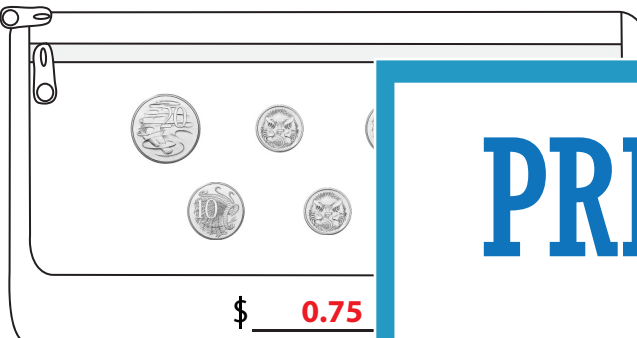
# Comparing Coins

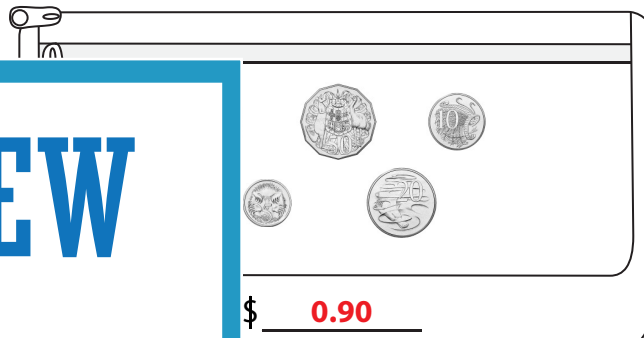
Count the coins in each pouch. Use  $<$ ,  $>$  or  $=$  symbols to compare the money.


1)   $\$$  5.35

$>$

  $\$$  4.90

2)   $\$$  0.75

  $\$$  0.90

3)   $\$$  8.55


**PREVIEW**


Gain complete access to the largest collection of worksheets in all subjects!


Members, please log in to download this worksheet.

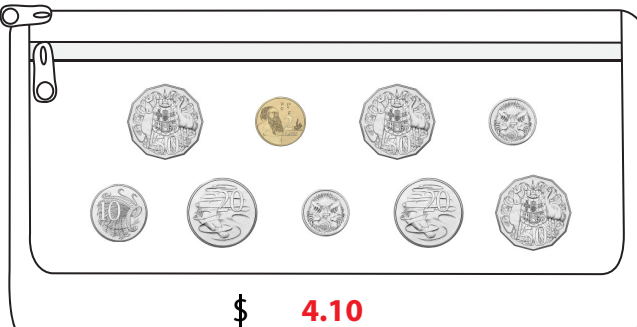
Not a member? Please sign up to gain complete access.

[www.mathworksheets4kids.com](http://www.mathworksheets4kids.com)


  $\$$  8.55

4)   $\$$  1.45

  $\$$  2.15

5)   $\$$  4.10

$>$

  $\$$  3.70