

Name: _____

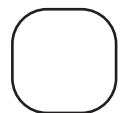

Who has More?

How much money does each child have in her/his pouch? Use < or > symbols to figure out who has more?


1) Derek has \$ _____




Rose has \$ _____




2) James has \$ _____




_____ has \$ _____



3) Jack has \$ _____



_____ has \$ _____



4) Clara has \$ _____



_____ has \$ _____



PREVIEW


Gain complete access to the largest collection of worksheets in all subjects!

Members, please log in to download this worksheet.



Not a member? Please sign up to gain complete access.

www.mathworksheets4kids.com

5) Katie has \$ _____



Jacob has \$ _____



Name: _____

Who has More?

How much money does each child have in her/his pouch? Use < or > symbols to figure out who has more?

1) Derek has \$ 73.25

Rose has \$ 82.45

<

Rose

2) James has \$ 10

James has \$ 110.90

3) Jack has \$ 31

Jack has \$ 28.85

4) Clara has \$ 19

Clara has \$ 12.95

Clara

5) Katie has \$ 57.15

Jacob has \$ 60.05

<

Jacob

PREVIEW

Gain complete access to the largest collection of worksheets in all subjects!

Members, please log in to download this worksheet.

Not a member? Please sign up to gain complete access.

www.mathworksheets4kids.com