

Name : _____





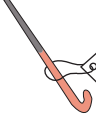
Ordering Money

A) Arrange the price from the least to the greatest.






1)

 \$67.35	 \$17.85	 \$42.36	 \$23.49	 \$29.48
---	---	---	--	---

2)






 \$55.50	 \$37.29	 \$84.29	 \$38.00	 \$63.92
---	---	---	--	---

3)

 \$40.25	 \$21.99	 \$8.65	 \$18.52	 \$14.56
--	--	---	---	--

B) Arrange the price from the greatest to the least.



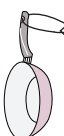
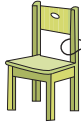

1)

 \$49.78	 \$68.00	 \$39.25	 \$25.68	 \$40.98
---	---	---	--	---

2)

 \$36.16	 \$32.41	 \$42.41	 \$70.14	 \$47.14
---	---	---	--	---






3)

 \$9.92	 \$23.42	 \$32.88	 \$46.72	 \$15.32
--	---	---	--	---






Name : _____

Ordering Money




A) Arrange the price from the least to the greatest.

 \$67.35	 \$17.85	 \$42.36	 \$23.49	 \$29.48
---	---	---	--	---

\$17.85, \$23.49, \$29.48, \$42.36, \$67.35

 \$55.50	 \$37.29	 \$84.29	 \$38.00	 \$63.92
---	---	---	--	---

\$37.29, \$38.00, \$55.50, \$63.92, \$84.29

 \$40.25	 \$21.99	 \$8.65	 \$18.52	 \$14.56
--	--	---	---	--

\$8.65, \$14.56, \$18.52, \$21.99, \$40.25


B) Arrange the price from the greatest to the least.

 \$49.78	 \$68.00	 \$39.25	 \$25.68	 \$40.98
---	---	---	--	---

\$68.00, \$49.78, \$40.98, \$39.25, \$25.68

 \$36.16	 \$32.41	 \$42.41	 \$70.14	 \$47.14
---	---	---	--	---

\$70.14, \$47.14, \$42.41, \$36.16, \$32.41

 \$9.92	 \$23.42	 \$32.88	 \$46.72	 \$15.32
--	---	---	--	---

\$46.72, \$32.88, \$23.42, \$15.32, \$9.92