

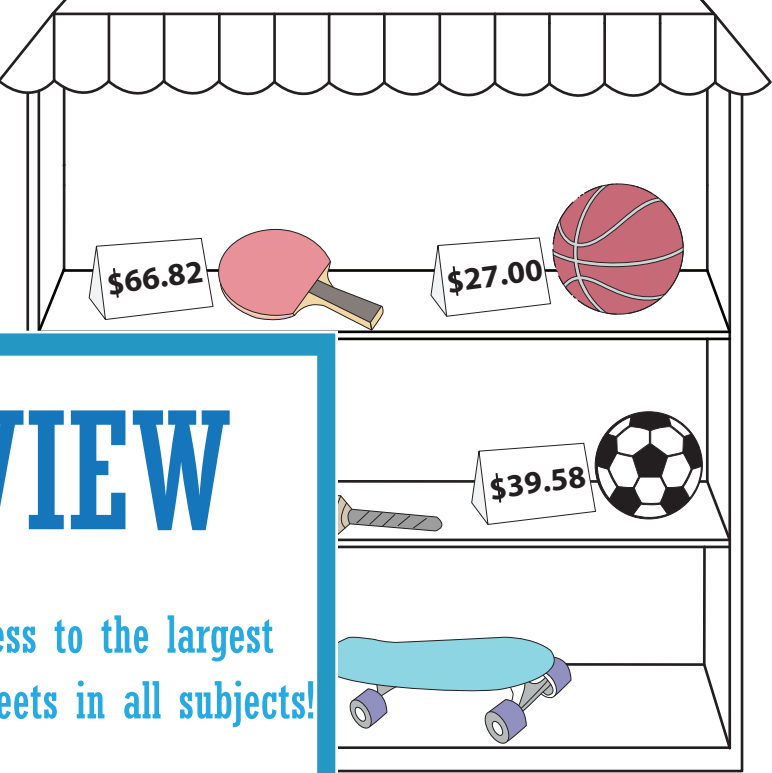
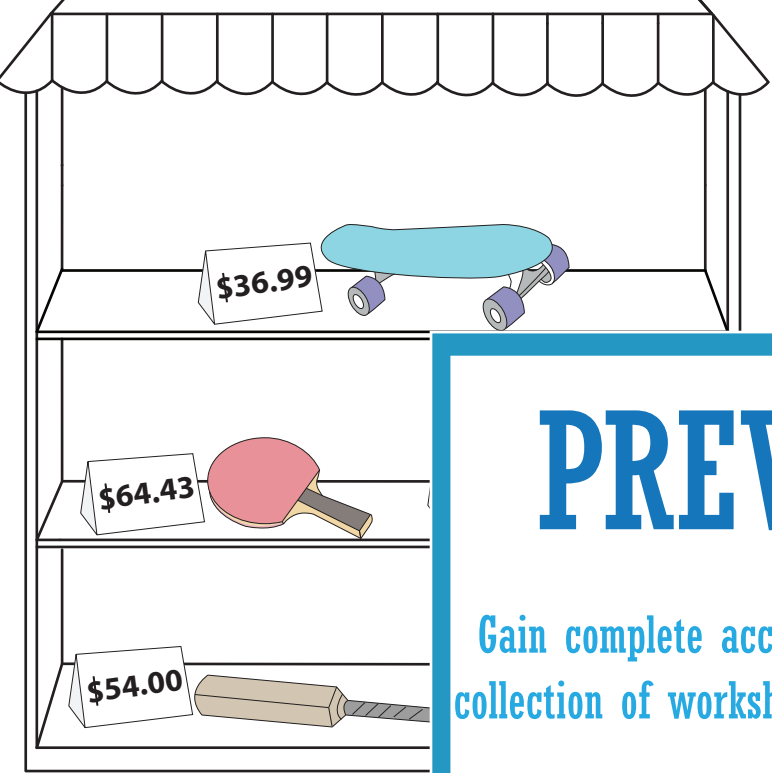
Name: \_\_\_\_\_

# Where Should I Buy?

Compare the price of the items in the two stores and write the better buy.

## Store 1

## Store 2



# PREVIEW

Gain complete access to the largest collection of worksheets in all subjects!

Members, please log in to download this worksheet.

Not a member? Please sign up to gain complete access.

[www.mathworksheets4kids.com](http://www.mathworksheets4kids.com)

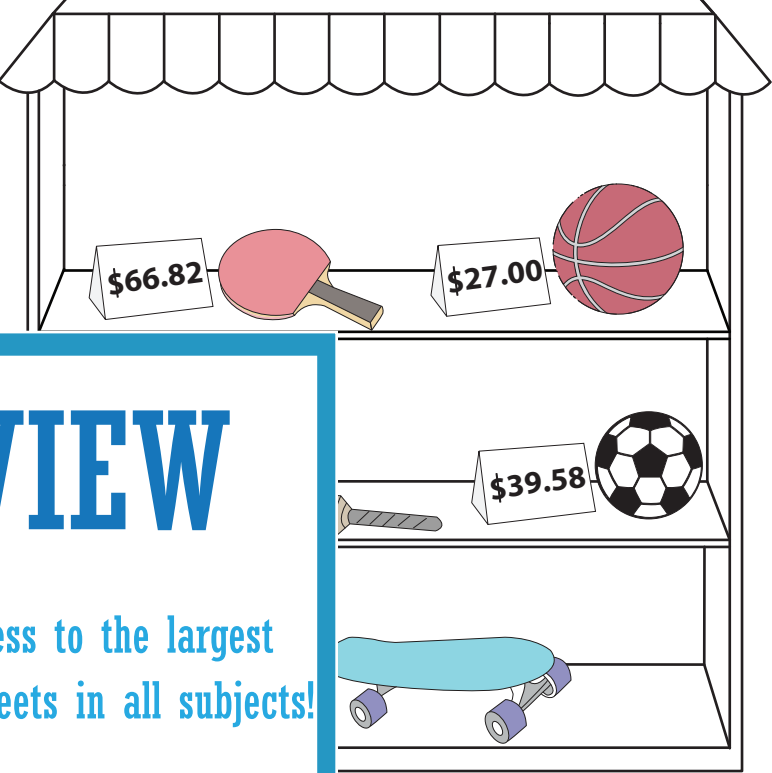
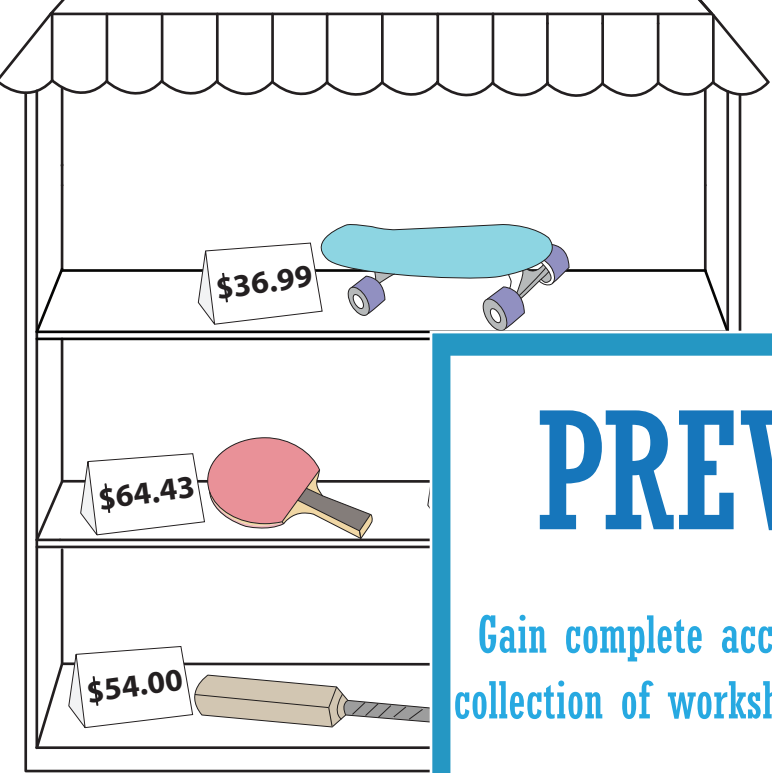
S.No	Items	Store 1	Store 2	Better Buy
1)		\$36.99		
2)		\$54.00		
3)		\$64.43	\$66.82	
4)			\$27.00	
5)			\$39.58	

**Where Should I Buy?**

Compare the price of the items in the two stores and write the better buy.

**Store 1**

**Store 2**



**PREVIEW**

Gain complete access to the largest collection of worksheets in all subjects!

Members, please log in to download this worksheet.

Not a member? Please sign up to gain complete access.

[www.mathworksheets4kids.com](http://www.mathworksheets4kids.com)

S.No	Items	Store 1 Price	Comparison	Store 2 Price	Better Buy
1)		\$36.99	<	\$66.82	Store 1
2)		\$54.00	>	\$39.58	Store 2
3)		\$64.43	<	\$66.82	Store 1
4)		\$23.12	<	\$27.00	Store 1
5)		\$40.06	>	\$39.58	Store 2