

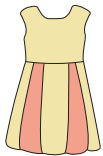
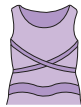
Cheap or Expensive?

A) Identify and check the cheapest item in each set.

1)

**\$47.00****\$46.68****\$46.99****\$49.32**

2)

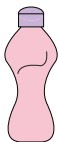
**\$15.05****\$17.98**

3)

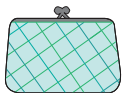
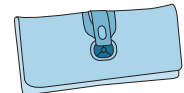
**\$53.53****\$51.82**

B) Identify and check the cheapest item in each set.



1)

**\$14.67****\$9.78**

2)

**\$26.17****\$21.63****\$29.90****\$29.19**

3)

**\$34.50****\$35.99****\$34.05****\$37.55**

PREVIEW

Gain complete access to the largest
collection of worksheets in all subjects!

Members, please
log in to
download this
worksheet.

Not a member?
Please sign up to
gain complete
access.

www.mathworksheets4kids.com